

Name: \_\_\_\_\_

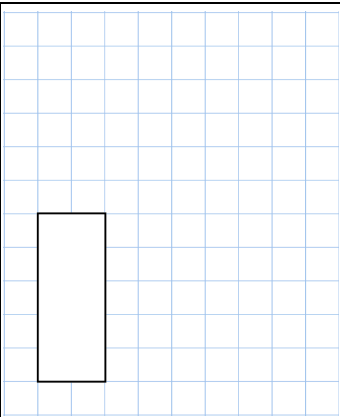
Primary 5-a-day

Bronze

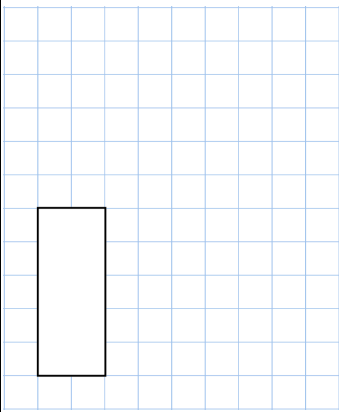


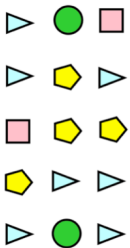
2nd January

$6 \times 6$


<input type="text"/>

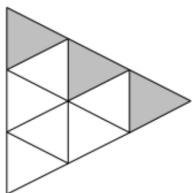
$125 - 50$


<input type="text"/>



What fraction of this shape is shaded?

Shape	Tally	Frequency
Circle		
Pentagon		
Square		
Triangle		



Mrs Williams has 80 sweets.

She gives 17 girls and 14 boys a sweet.

How many sweets are left?

Name: \_\_\_\_\_

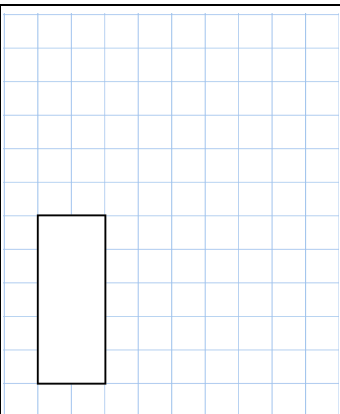
Primary 5-a-day

Bronze

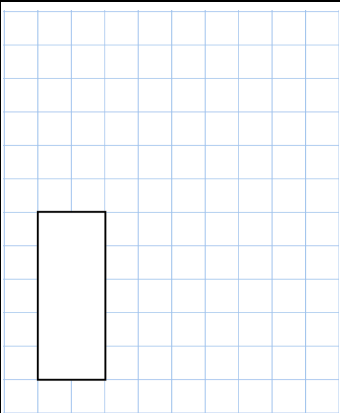


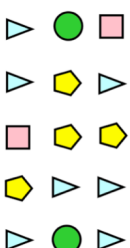
2nd January

$6 \times 6$


<input type="text"/>

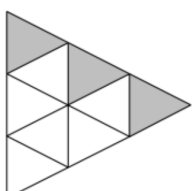
$125 - 50$


<input type="text"/>



What fraction of this shape is shaded?

Shape	Tally	Frequency
Circle		
Pentagon		
Square		
Triangle		



Mrs Williams has 80 sweets.

She gives 17 girls and 14 boys a sweet.

How many sweets are left?