

Name: _____

Primary 5-a-day

Bronze

10th January



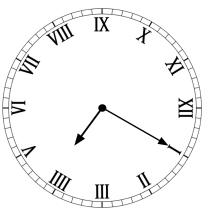
$13 + 88$

23×4

<input type="text"/>

<input type="text"/>

What time is shown on the clock?

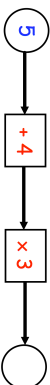


minutes past

43	14	40	56	33
19	46	28	20	17

What is the biggest number you can get by adding any two numbers from the grid?

Find the missing number



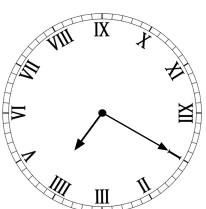
$13 + 88$

23×4

<input type="text"/>

<input type="text"/>

What time is shown on the clock?

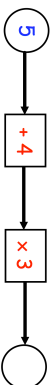


minutes past

43	14	40	56	33
19	46	28	20	17

What is the biggest number you can get by adding any two numbers from the grid?

Find the missing number



Name: _____

Primary 5-a-day

Bronze

10th January

