

Name: _____

Primary 5-a-day

Bronze



19th January

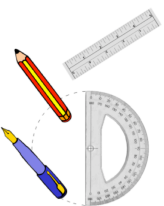
$$6 \times 0$$

<input type="text"/>

$$23 + 14 - 18$$

<input type="text"/>

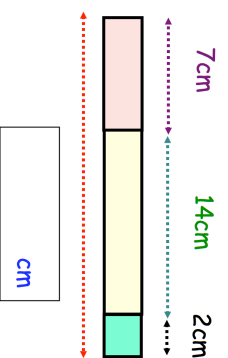
A ruler cost 45p
A protractor cost 30p
A pencil cost 25p
A pen cost 15p
James buys one ruler, one protractor,
one pencil and one pen.



Work out the total cost?

How much change should he get from £2?

Vicky put a pink block, yellow block and
blue block beside each other
Work out the total length



Name: _____

Primary 5-a-day

Bronze



19th January

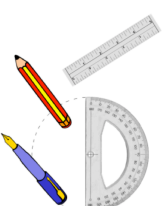
$$6 \times 0$$

<input type="text"/>

$$23 + 14 - 18$$

<input type="text"/>

A ruler cost 45p
A protractor cost 30p
A pencil cost 25p
A pen cost 15p
James buys one ruler, one protractor,
one pencil and one pen.



Work out the total cost?

How much change should he get from £2?

Vicky put a pink block, yellow block and
blue block beside each other
Work out the total length

