

Name: _____

Primary 5-a-day

Bronze



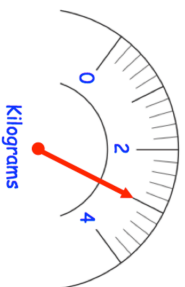
22nd January

$$32 \div 4$$

$$202 + 8$$

Megan is buying carrots.

What amount of carrots does she buy?



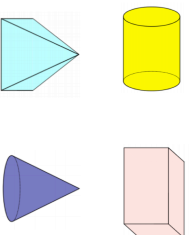
Sinead buys an ice cream for £1.30
She pays with a £2 coin.



How much change should Sinead receive?

Two shapes have **more than 6 edges**

Circle them.



Name: _____

Primary 5-a-day

Bronze



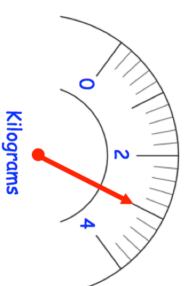
22nd January

$$32 \div 4$$

$$202 + 8$$

Megan is buying carrots.

What amount of carrots does she buy?



Sinead buys an ice cream for £1.30
She pays with a £2 coin.



How much change should Sinead receive?

Two shapes have **more than 6 edges**

Circle them.

