

Name: _____

Primary 5-a-day

Bronze



26th January

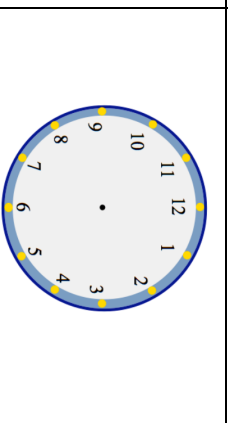
$$17p + 61p$$

$$3 \times 9$$

Grid for calculation. A box contains the letter 'p'.

Grid for calculation. A box is empty.

Show the time **ten past nine** on the clock

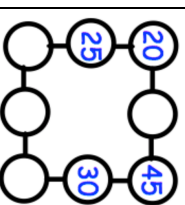


A carton of milk costs 55p



Find the cost of three cartons of milk

In the diagram, three circles in a straight line **add to 100**.
Write in the missing numbers.



Name: _____

Primary 5-a-day

Bronze



26th January

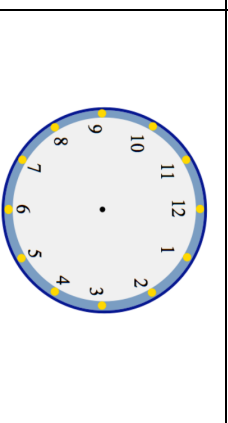
$$17p + 61p$$

$$3 \times 9$$

Grid for calculation. A box contains the letter 'p'.

Grid for calculation. A box is empty.

Show the time **ten past nine** on the clock



A carton of milk costs 55p



Find the cost of three cartons of milk

In the diagram, three circles in a straight line **add to 100**.
Write in the missing numbers.

