

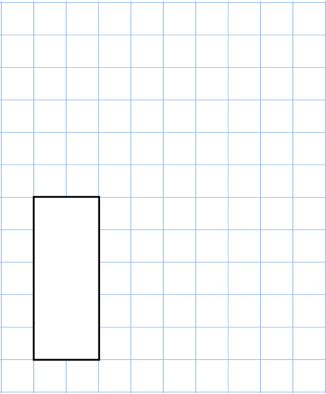
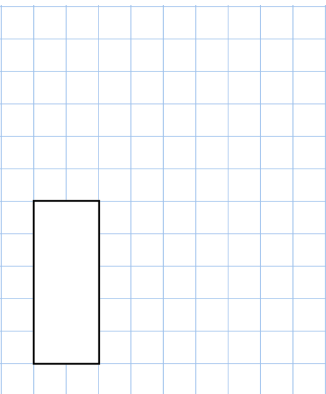
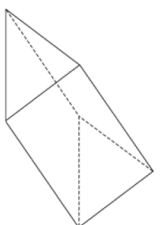
Name: _____

Primary 5-a-day

Bronze

3rd January



$55 \div 5$	20×30
	
60 $\xrightarrow{\text{is 15 more than}}$ 45 \square $\xrightarrow{\text{is 15 more than}}$ 77	
How many edges does a triangular prism have?	
Mr Smith had 95 Christmas cards to post. He has posted 48 so far. How many Christmas cards does he have left to post?	

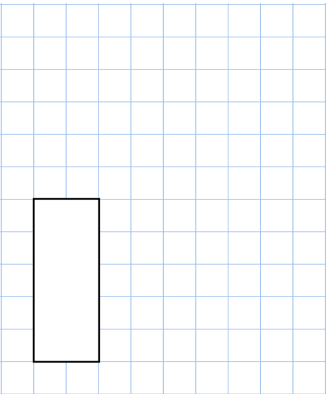
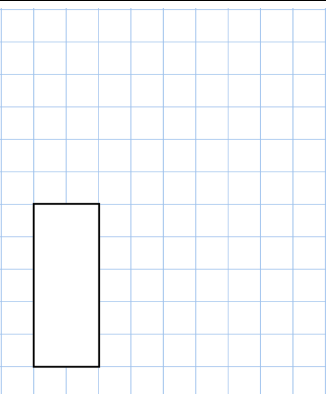
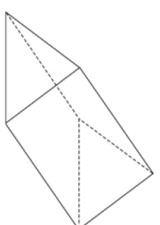
Name: _____

Primary 5-a-day

Bronze

3rd January



$55 \div 5$	20×30
	
60 $\xrightarrow{\text{is 15 more than}}$ 45 \square $\xrightarrow{\text{is 15 more than}}$ 77	
How many edges does a triangular prism have?	
Mr Smith had 95 Christmas cards to post. He has posted 48 so far. How many Christmas cards does he have left to post?	