

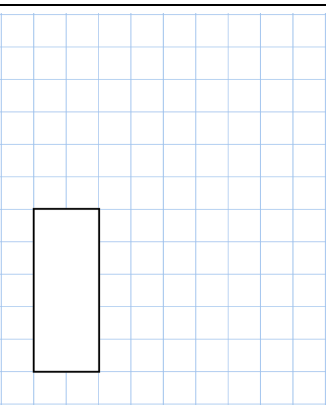
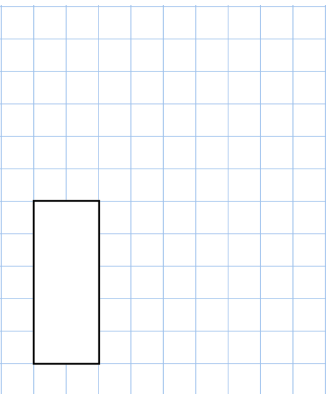

Name: \_\_\_\_\_

Primary 5-a-day

Bronze

5th January



$30 \div 6$	$40 \times 3$
 <input type="text"/>	 <input type="text"/>
A music lesson begins at 5:30pm The music lesson ends at 6:15pm How long did the lesson last?	
<input type="text"/> <input type="text"/> <input type="text"/> 8   7   9 Using each number card once, make the smallest possible number	<input type="text"/> <input type="text"/> <input type="text"/>
Bethany puts six 20p pieces into the piggy bank. Her mum then puts four 50p pieces into the piggy bank. How much money is in the piggy bank?	

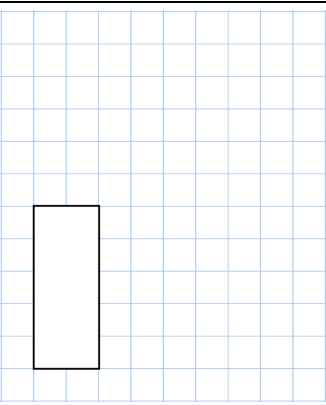
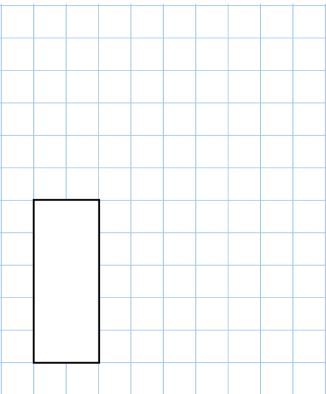
Name: \_\_\_\_\_

Primary 5-a-day

Bronze

5th January



$30 \div 6$	$40 \times 3$
 <input type="text"/>	 <input type="text"/>
A music lesson begins at 5:30pm The music lesson ends at 6:15pm How long did the lesson last?	
<input type="text"/> <input type="text"/> <input type="text"/> 8   7   9 Using each number card once, make the smallest possible number	<input type="text"/> <input type="text"/> <input type="text"/>
Bethany puts six 20p pieces into the piggy bank. Her mum then puts four 50p pieces into the piggy bank. How much money is in the piggy bank?	