

Name: _____

Primary 5-a-day

Gold

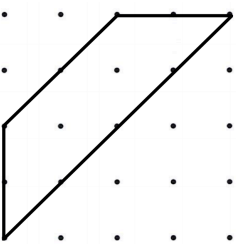


17th January

$$144 \div 12$$


$$5.6 + 2.51 + 0.9$$

Paul draws this shape on a grid



He turns his grid one quarter turn clockwise

Draw the shape in its new position after the turn



A theatre as 46 rows.
There are 28 seats in each row.

During a show at the theatre, there are 80 empty seats

Work out how many people are watching the show

Name: _____

Primary 5-a-day

Gold

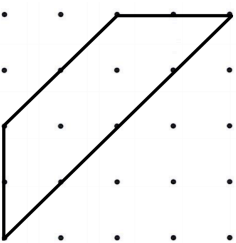


17th January

$$144 \div 12$$


$$5.6 + 2.51 + 0.9$$

Paul draws this shape on a grid



He turns his grid one quarter turn clockwise

Draw the shape in its new position after the turn



A theatre as 46 rows.
There are 28 seats in each row.

During a show at the theatre, there are 80 empty seats

Work out how many people are watching the show