

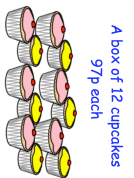
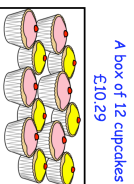
Name: _____

Primary 5-a-day

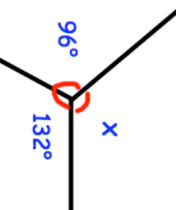
Gold



<p>30th January</p> <p>$34,000 - 1,635$</p> <p>$\frac{2}{5} + \frac{1}{10} + \frac{1}{5}$</p> <p>Work out the size of the missing angle</p> <p>Write 600 in Roman numerals</p>	<p>$\frac{2}{5} + \frac{1}{10} + \frac{1}{5}$</p> <p>How much more does Megan pay than Lewis?</p>
--	--



Lewis bought 12 cupcakes for £10.29
Megan bought 12 cupcakes for 97p each



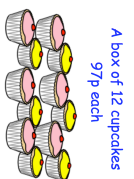
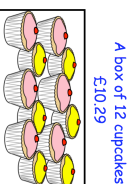
Name: _____

Primary 5-a-day

Gold



<p>30th January</p> <p>$34,000 - 1,635$</p> <p>$\frac{2}{5} + \frac{1}{10} + \frac{1}{5}$</p> <p>Work out the size of the missing angle</p> <p>Write 600 in Roman numerals</p>	<p>$\frac{2}{5} + \frac{1}{10} + \frac{1}{5}$</p> <p>How much more does Megan pay than Lewis?</p>
--	--



Lewis bought 12 cupcakes for £10.29
Megan bought 12 cupcakes for 97p each

