

Name: _____

Primary 5-a-day

Gold



31st January

$$9 \overline{) 567}$$

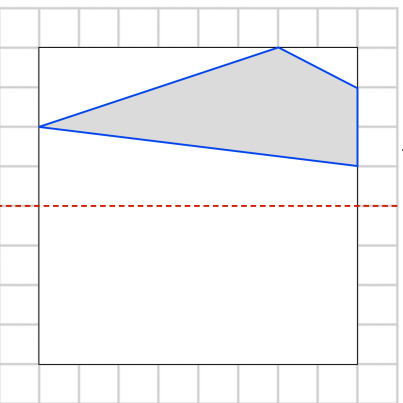
$$200 - 210$$

A basketball team plays 5 matches
The number of points they score in each
match is
58, 41, 57, 39, 55

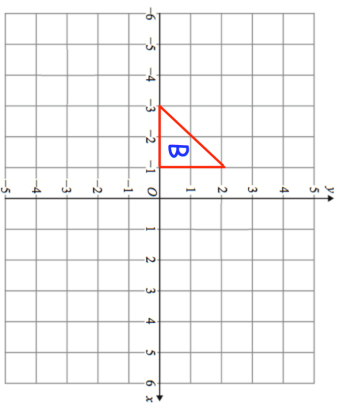


Work out the mean number of points
scored

Reflect the shape in the red mirror line



Translate triangle B 6 squares **right** and
1 square **up**



Name: _____

Primary 5-a-day

Gold



31st January

$$9 \overline{) 567}$$

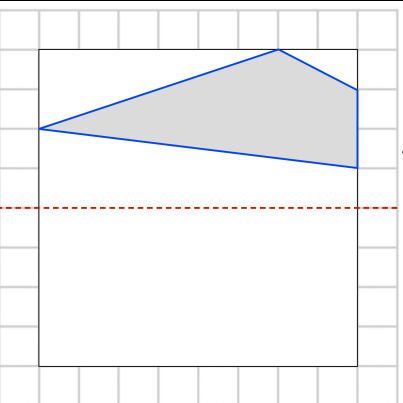
$$200 - 210$$

A basketball team plays 5 matches
The number of points they score in each
match is
58, 41, 57, 39, 55



Work out the mean number of points
scored

Reflect the shape in the red mirror line



Translate triangle B 6 squares **right** and
1 square **up**

