

Name: _____

Primary 5-a-day

Gold

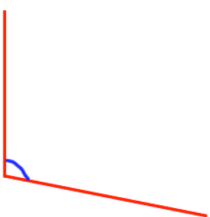


4th January

$$1,545 \times 1000$$

$$8 - 2.22$$

Measure this angle



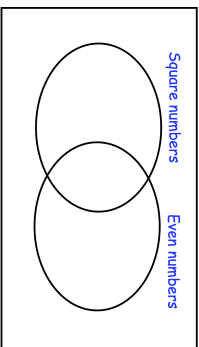
The table shows the number of people living in three different countries.

Country	Population
Canada	36,624,199
Mexico	129,684,378
Turkey	81,127,417

What is the difference between the numbers of people living in Turkey and Canada.

Write each number in its correct place on the diagram

15 16 17 18



Name: _____

Primary 5-a-day

Gold

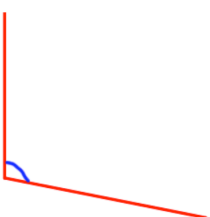


4th January

$$1,545 \times 1000$$

$$8 - 2.22$$

Measure this angle



The table shows the number of people living in three different countries.

Country	Population
Canada	36,624,199
Mexico	129,684,378
Turkey	81,127,417

What is the difference between the numbers of people living in Turkey and Canada.

Write each number in its correct place on the diagram

15 16 17 18

