

Name: \_\_\_\_\_

Primary 5-a-day

Platinum



1st January

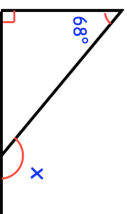
$$70 + 24 \div 2$$

$$\frac{5}{6} \times \frac{3}{5}$$

Grid area for the first problem, containing a blank rectangular box for the answer.

Grid area for the second problem, containing a blank rectangular box for the answer.

Find the size of the angle labeled x




At the end of a film, the year is given in Roman numerals.

Write the year MMIX in figures



In this rectangle,  $\frac{1}{3}$  is shaded purple  
 $\frac{1}{5}$  is shaded green.



What fraction of the rectangle is not shaded?

Name: \_\_\_\_\_

Primary 5-a-day

Platinum



1st January

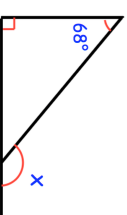
$$70 + 24 \div 2$$

$$\frac{5}{6} \times \frac{3}{5}$$

Grid area for the first problem, containing a blank rectangular box for the answer.

Grid area for the second problem, containing a blank rectangular box for the answer.

Find the size of the angle labeled x




At the end of a film, the year is given in Roman numerals.

Write the year MMIX in figures



In this rectangle,  $\frac{1}{3}$  is shaded purple  
 $\frac{1}{5}$  is shaded green.



What fraction of the rectangle is not shaded?