

Name: _____

Primary 5-a-day

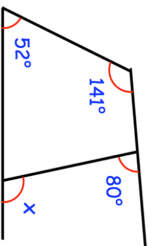
Platinum



17th January

$$73,283 + 18,909 + 4,500$$

$$71 \times 181$$

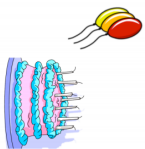


Find the size of angle x

Rebecca is $\frac{1}{6}$ of Samuel's age.

Samuel is 7 years younger than Louise.

If Rebecca is 9 years old, how old is Louise?



Ben and Holly share 30 marbles in the ratio 2:3.

How many marbles does Holly receive?

Name: _____

Primary 5-a-day

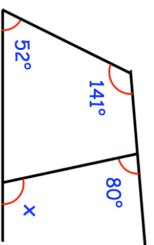
Platinum



17th January

$$73,283 + 18,909 + 4,500$$

$$71 \times 181$$

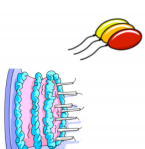


Find the size of angle x

Rebecca is $\frac{1}{6}$ of Samuel's age.

Samuel is 7 years younger than Louise.

If Rebecca is 9 years old, how old is Louise?



Ben and Holly share 30 marbles in the ratio 2:3.

How many marbles does Holly receive?