

Name: _____

Primary 5-a-day

Platinum



6th January

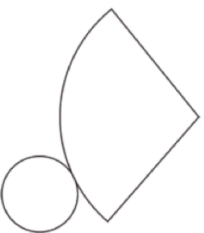
$$0.9 \times 800$$

$$65\% \times 3,000$$



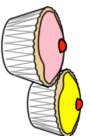
Here is a net for a 3D shape

Which shape?



Burt is making cupcakes
He has made 300 cupcakes.
Burt places the cupcakes in boxes of 16.

How many boxes can he fill?



Raspberries cost £13.30 per kg
Mangos cost £6.20 per kg
4 pineapples cost £5

Work out the cost of 10kg of raspberries,
13kg of mangos and 6 pineapples.

Name: _____

Primary 5-a-day

Platinum



6th January

$$0.9 \times 800$$

$$65\% \times 3,000$$



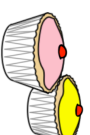
Here is a net for a 3D shape

Which shape?



Burt is making cupcakes
He has made 300 cupcakes.
Burt places the cupcakes in boxes of 16.

How many boxes can he fill?



Raspberries cost £13.30 per kg
Mangos cost £6.20 per kg
4 pineapples cost £5

Work out the cost of 10kg of raspberries,
13kg of mangos and 6 pineapples.