

Name: _____

Primary 5-a-day

Platinum



7th January

$$2\frac{1}{2} \times 49$$

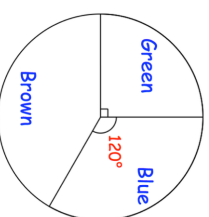
$$20 - 5 \times 3 - 4$$

<input type="text"/>

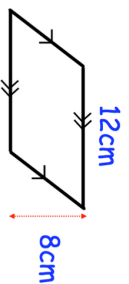
<input type="text"/>

There are 24 students in a class.
The pie chart shows information about their eye colour.

How many students have brown eyes?



Find the area of the parallelogram



Tomas had some money

He spent £1.55 on a coffee.
He spent £2.25 on a muffin.
He has **four-fifths** of his money left.

How much money did Tomas have to **start** with?

Name: _____

Primary 5-a-day

Platinum



7th January

$$2\frac{1}{2} \times 49$$

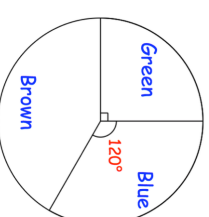
$$20 - 5 \times 3 - 4$$

<input type="text"/>

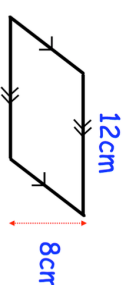
<input type="text"/>

There are 24 students in a class.
The pie chart shows information about their eye colour.

How many students have brown eyes?



Find the area of the parallelogram



Tomas had some money

He spent £1.55 on a coffee.
He spent £2.25 on a muffin.
He has **four-fifths** of his money left.

How much money did Tomas have to **start** with?