

Name: _____

Primary 5-a-day

Platinum



8th January

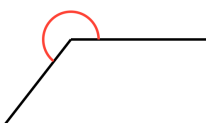
20% of 6,500

$1026 \div 38$

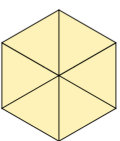
Grid area for calculation

Grid area for calculation

Measure this angle



Shown is an equilateral triangle with side length of 8cm.
Six of the triangles are put together to make a larger shape.
Find the perimeter of the larger shape.



Shown are four number cards.

The mean of the cards is 9.

Work out the missing number.

Name: _____

Primary 5-a-day

Platinum



8th January

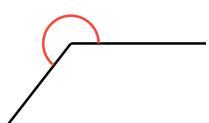
20% of 6,500

$1026 \div 38$

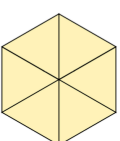
Grid area for calculation

Grid area for calculation

Measure this angle



Shown is an equilateral triangle with side length of 8cm.
Six of the triangles are put together to make a larger shape.
Find the perimeter of the larger shape.



Shown are four number cards.

The mean of the cards is 9.

Work out the missing number.