

Name: \_\_\_\_\_

Primary 5-a-day

Silver



6th January

$$\begin{array}{r} 5 \\ \underline{230} \\ \end{array}$$



6cm

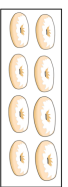
20cm

$$- 200 = 3,859$$

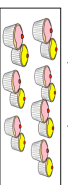


Work out the perimeter of the rectangle

Jamie has £56  
Anne has £12 less than Jamie  
Tom has twice as much money as Jamie  
How much money do they all have in total?



8 Doughnuts per box



14 Cupcakes per box

Ruby buys 21 boxes of doughnuts  
She buys 4 boxes of cupcakes

Ruby says, "I have three times as many cupcakes than doughnuts."  
Is she correct?

Name: \_\_\_\_\_

Primary 5-a-day

Silver



6th January

$$\begin{array}{r} 5 \\ \underline{230} \\ \end{array}$$



6cm

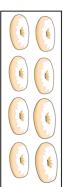
20cm

$$- 200 = 3,859$$

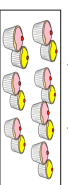


Work out the perimeter of the rectangle

Jamie has £56  
Anne has £12 less than Jamie  
Tom has twice as much money as Jamie  
How much money do they all have in total?



8 Doughnuts per box



14 Cupcakes per box

Ruby buys 21 boxes of doughnuts  
She buys 4 boxes of cupcakes

Ruby says, "I have three times as many cupcakes than doughnuts."  
Is she correct?