

Name: _____

Primary 5-a-day

Silver

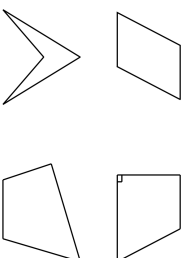


7th January


$$123 \times 4$$

$$\frac{1}{4} + \frac{1}{4} + \frac{1}{4}$$

Circle the **quadrilateral** with exactly three acute angles



In a shop, 3 apples cost the same as 2 bananas



One banana costs 57p

How much does **one** apple cost?

Circle the number that is **10 times** greater than eight hundred and forty.

8,040 84 8,004 8,400 840

Name: _____

Primary 5-a-day

Silver

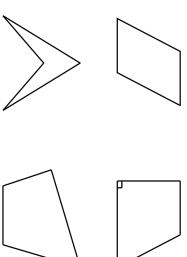


7th January


$$123 \times 4$$

$$\frac{1}{4} + \frac{1}{4} + \frac{1}{4}$$

Circle the **quadrilateral** with exactly three acute angles



In a shop, 3 apples cost the same as 2 bananas



One banana costs 57p

How much does **one** apple cost?

Circle the number that is **10 times** greater than eight hundred and forty.

8,040 84 8,004 8,400 840