

Name: Answers

Primary 5-a-day

Bronze



28th June

$485 + 7$

492

8×0

0



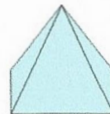
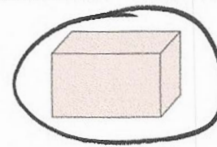
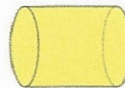
What time is shown on the clock?

5

minutes to

4

Circle the cuboid



Work out the **product** of 5 and 12

$5 \times 12 = 60$