

Name: \_\_\_\_\_



17th March

$36 \div 2$

$$\begin{array}{r} 18 \\ 2 \overline{)36} \\ \underline{36} \\ 0 \end{array}$$

18


$25 + 62$

$$\begin{array}{r} 62 \\ + 25 \\ \hline 87 \end{array}$$

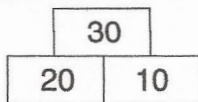
87

There are 6 eggs in a carton.  
Patrick buys 7 cartons of egg.  
How many eggs does Patrick buy?

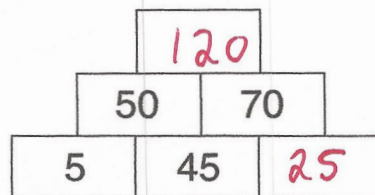
$6 \times 7 = 42$



Below is an addition pyramid.  
To find the number in a block, add the two blocks below it



Find the missing numbers in this addition pyramid



Use each card **once** to make the **smallest** total

$49 + 57 = 106$

or  
 $47 + 59$