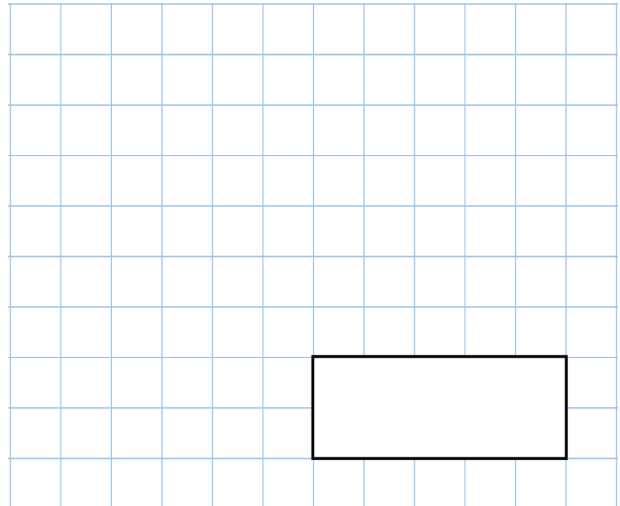
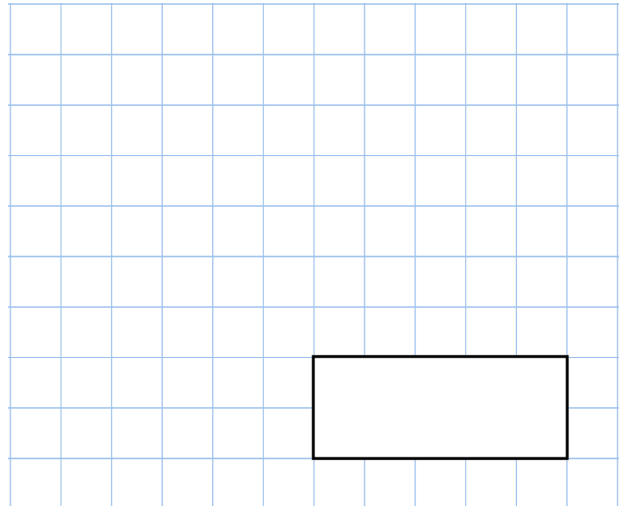
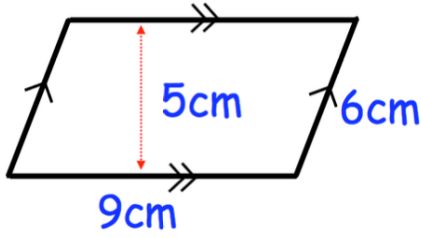




2nd February	
<p><math>40 \div 2^2 + 12 \div 2</math></p> 	<p><math>3,254 \times 27</math></p> 
<p>Billy thinks of a number that is not zero. He multiplies his number by <math>-3</math> Tick the correct box</p>	<p>The answer is positive <input type="checkbox"/></p> <p>The answer is negative <input type="checkbox"/></p> <p>The answer could be positive or negative <input type="checkbox"/></p>
<p>Find the area of the parallelogram</p>	
<p>Shown are two identical rectangles Find the length of one rectangle</p>	