

Name: _____

Primary 5-a-day

Gold

30th April



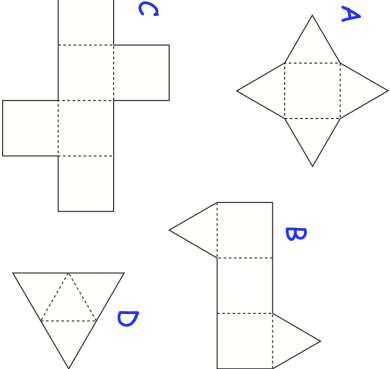
$\frac{7}{20}$ of 1,960

<input type="text"/>

406×17

<input type="text"/>

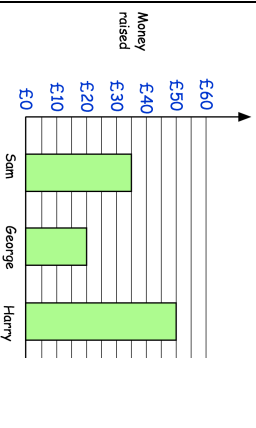
Here are some nets



Which letter is the net of a cube?

Which letter is the net of a triangular prism?

Work out the mean amount of money raised



Name: _____

Primary 5-a-day

Gold

30th April



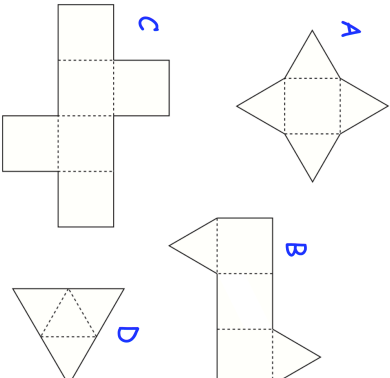
$\frac{7}{20}$ of 1,960

<input type="text"/>

406×17

<input type="text"/>

Here are some nets



Which letter is the net of a cube?

Which letter is the net of a triangular prism?

Work out the mean amount of money raised

