

Name: \_\_\_\_\_

Primary 5-a-day

Platinum



30th June

$$65 \times 895$$

$$18 \div 5$$

Grid for calculation of  $65 \times 895$ . Includes a rectangular box for the answer.

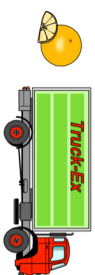
Grid for calculation of  $18 \div 5$ . Includes a rectangular box for the answer.

Ava has 24 crates of oranges.

Each crate weighs 42.3 kilograms.

Ava's van can hold up to **one tonne**.

Will the van be able to carry all 24 crates?



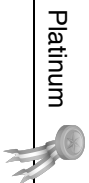
Draw a  $280^\circ$  angle

At the end of a film, the year is given in Roman numerals as MMXIV  
Write the year MMXIV in figures.

Name: \_\_\_\_\_

Primary 5-a-day

Platinum



30th June

$$65 \times 895$$

$$18 \div 5$$

Grid for calculation of  $65 \times 895$ . Includes a rectangular box for the answer.

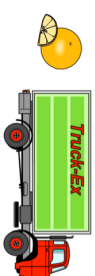
Grid for calculation of  $18 \div 5$ . Includes a rectangular box for the answer.

Ava has 24 crates of oranges.

Each crate weighs 42.3 kilograms.

Ava's van can hold up to **one tonne**.

Will the van be able to carry all 24 crates?



Draw a  $280^\circ$  angle

At the end of a film, the year is given in Roman numerals as MMXIV  
Write the year MMXIV in figures.