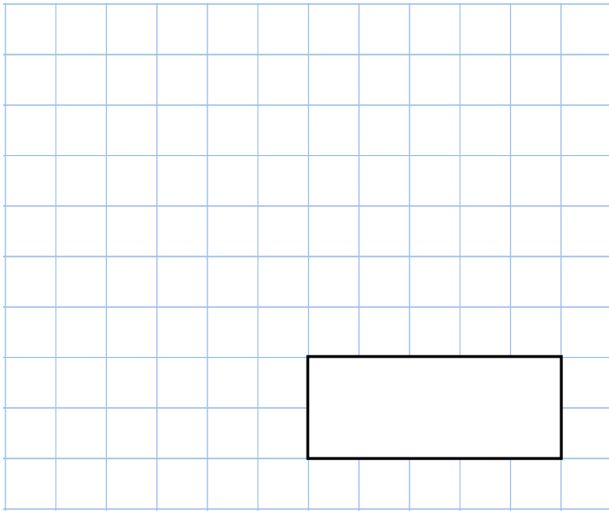


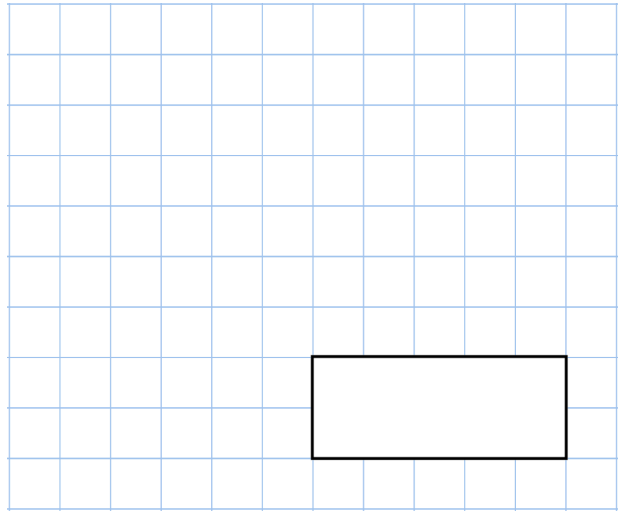


2nd January

$425 - 170$



8×44

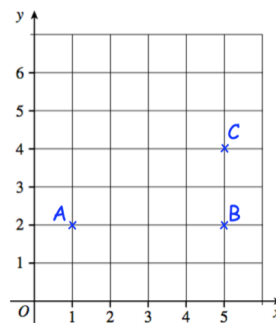


Arrange these numbers in order, starting with the largest

15,123 15,200 15,032 15,103

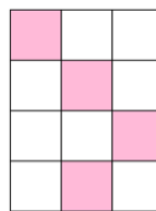
Three points are shown on a grid. ABCD is a rectangle.

Write down the coordinates of the point D

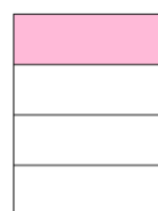


Two of the shapes have been shaded so that $\frac{1}{3}$ of the shape is shaded.


Which of the shapes is not $\frac{1}{3}$ shaded?



Shape A



Shape B



Shape C