



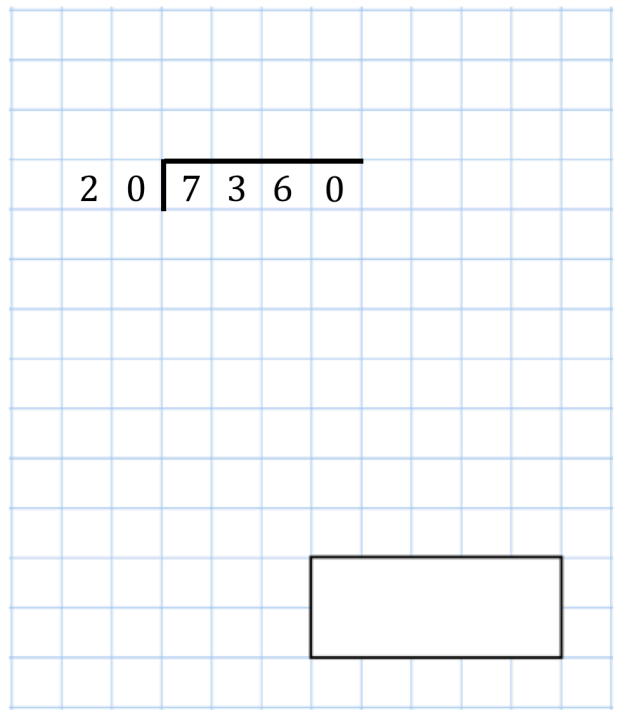


24th December

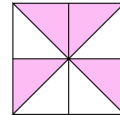
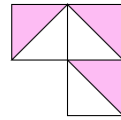
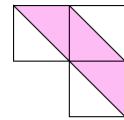
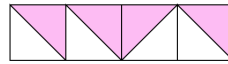
$$0.75 = \frac{\square}{\square}$$



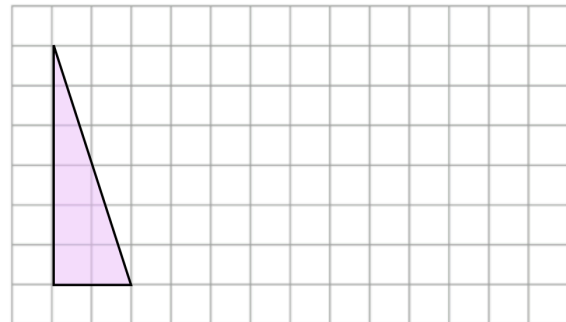
2 0 | 7 3 6 0



For each pattern for a tick if it has a line of symmetry or a cross if it does not.



Draw a rectangle on the grid with an area three times greater than the area of the triangle



Joshua has £4 to spend on oranges.
Small oranges cost 25p each
Large oranges cost 35p each

He decides to buy only small oranges or only large oranges.

How many **more** small oranges than large oranges can he buy for £4?

