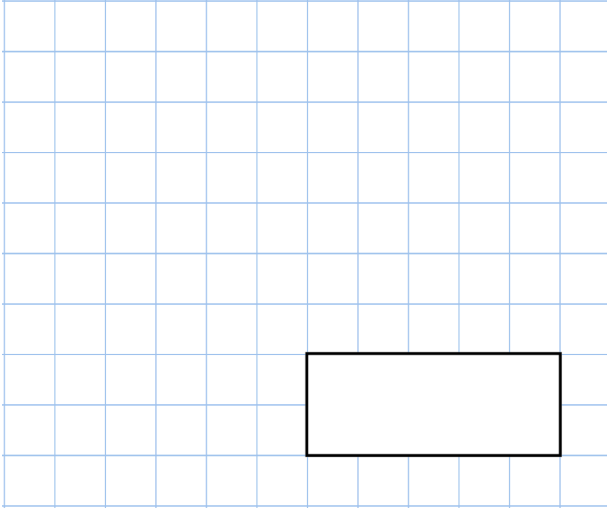
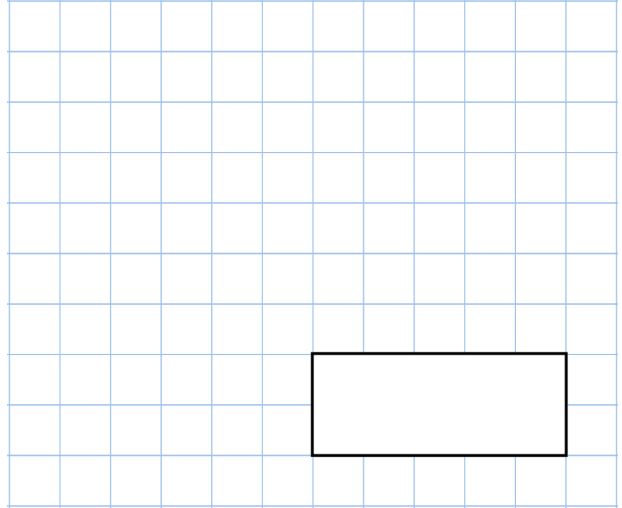


**7th February**

45% of 1,300



$$\frac{3}{4} + \frac{1}{5}$$



25% of the children in a school have a dog.

10% of the children who have a dog also have a cat.

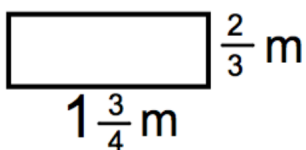
There are 12 children who have both a dog and a cat.

How many children go to the school?



Which pattern uses 77 dots?

Jessica wants to attach ribbon around the top of her wardrobe. She has 4m of ribbon



How much more ribbon does she need?