



26th April

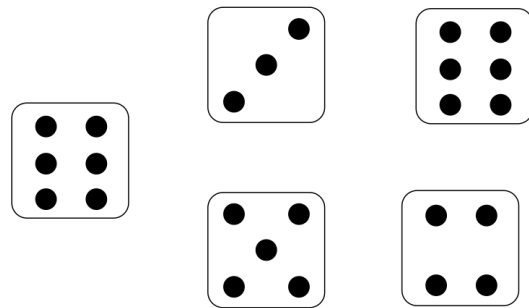
$$10 - \square = 10$$

$$1 + 11 = \square$$

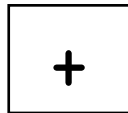
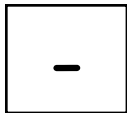
$$17 - 3 = \square$$

$$9 + 6 = \square$$

Circle the two dice that add up to 12



Here are two signs.



Write a sign in each box to make each calculation correct.

$$35 \square 1 = 34$$

$$30 \square 1 = 29$$

Show the time **half past eight** on the clock.