

Name: _____

Primary 5-a-day

Ruby



8th April




$4 - 2 =$

$16 - 5 =$

$17 + 2 =$

$7 + 11 =$

Tick the box with the **most** balls.



Match the numbers that **add to 20**

11

15

18

12

8

9

2

5

Amelia has 13 sweets.

Olivia has 6 more sweets than Amelia.

How many sweets does Olivia have?