

Name: \_\_\_\_\_

Primary 5-a-day

Ruby



1st April

$19 + 1 =$

20

$10 + 5 =$

5

$13 - 3 =$


10

Double 4

8

How many dots are there altogether?

$4 + 5 = 9$



9

Tick the number **seventeen**

77

70

17 ✓

George has a 20p coin.

He buys an apple for 15p.

How much change will he get back?

$20 - 15 = 5$

5 p

Name: \_\_\_\_\_

Primary 5-a-day

Ruby



2nd April

$7 - 1 =$

6

$4 + 12 =$

16

$6 + 7 =$

13

$20 - 13 =$

7

Eva has 6 bananas.



Sofia has 3 bananas.



How many bananas do they have altogether?

$6 + 3 = 9$

9

Count up in fives.

5

10

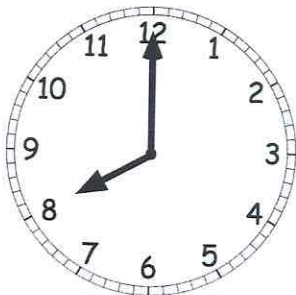
15

20

25

30

What time does the clock show?  
Tick the correct box.



12 o'clock

8 o'clock ✓

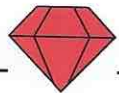
half past 8

half past 12

Name: \_\_\_\_\_

Primary 5-a-day

Ruby



3rd April

$2 - 1 =$

$10 + 7 =$

$18 - 14 =$

$6 =$

$- 10$

Put a tick (✓) above the penguin that is 5<sup>th</sup> in the line.



start

end

Tick the day before Wednesday.

Monday

Tuesday ✓

Sunday

Thursday

Matthew has 17 conkers.

He gives 5 conkers to his brother.

He gives 4 conkers to his sister.

How many conkers does Matthew have left?

$17 - 5 = 12$

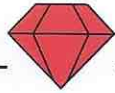
$12 - 4 = 8$

8

Name: \_\_\_\_\_

Primary 5-a-day

Ruby



4th April

$7 + 1 =$

8

$3 + 5 =$

8

$20 -$

11


$= 9$

Double 8

16

What number is **3 less** than the number on the dice?

$4 - 3 = 1$



1

Circle the coins that are worth **more than 5p**



Write the missing number in the box.

13

+

4

-

8

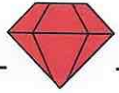
=

9

Name: \_\_\_\_\_

Primary 5-a-day

Ruby



5th April

$8 + 2 =$

10

$5 - 2 =$

3

$3 + 3 + 3 =$

9

$17 - 7 =$

10

How many sides does a kite have?

4

Ella is counting up in tens to 50.

Shade the rest of the numbers that she will say.

1	2	3	4	5	6	7	8	9	10
11	12	13	14	15	16	17	18	19	20
21	22	23	24	25	26	27	28	29	30
31	32	33	34	35	36	37	38	39	40
41	42	43	44	45	46	47	48	49	50

Write down three numbers that have a **total of 18**

5

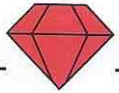
3

10

Name: \_\_\_\_\_

Primary 5-a-day

Ruby



6th April

$7 - 1 =$

6

$9 +$

1

$= 10$

$6 + 3 =$

9

$12 -$

7

$= 5$

Which jug is **least full**?

Jug 1

Jug 2

Jug 3

Jug 4



2

Add together 7 and 6.

13

A shop sells

an apple for 10p

a banana for 6p

a strawberry for 3p

a cherry for 1p

Find the cost of




$10 + 6 + 3$

19 p

Name: \_\_\_\_\_

Primary 5-a-day

Ruby



7th April

$2 + 4 =$

6

$18 - 1 =$

17

$10 - 8 =$

2

$7 + 13 =$

20

Make each statement correct by writing **more** or **less** in each box.

52 is

more

than 37

25 is

less

than 34

15 is

less

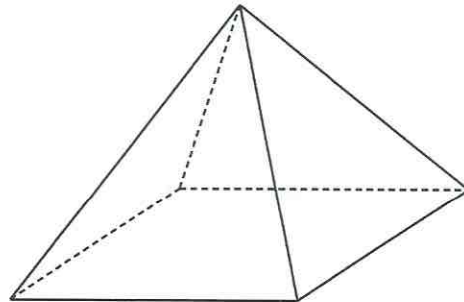
than 50

Tick the name of the shape.

Cuboid

Cylinder

Pyramid ✓



This picture shows  $9 + 1 = 10$

10	
9	1

Here is another picture.


Write the missing number in the box.

17	
4	13

Name: \_\_\_\_\_

Primary 5-a-day

Ruby



8th April

$4 - 2 =$

2

$16 - 5 =$

11

$17 + 2 =$

19


$7 + 11 =$

18


Tick the box with the **most** balls.



7



6



8

Match the numbers that **add to 20**

11

15

18

12

8

9

2

5

Amelia has 13 sweets.

Olivia has 6 more sweets than Amelia.

How many sweets does Olivia have?

$13 + 6 = 19$

19

Name: \_\_\_\_\_

Primary 5-a-day

Ruby



9th April

$$17 - 2 = \boxed{15}$$

$$9 + 2 = \boxed{11}$$

$$10 - \boxed{10} = 0$$


$$\boxed{13} - 8 = 5$$

Write the correct number in each box.

15 is 1 less than

19 is 1 more than

Tick the box that has 15p



Orla needs 19 mushrooms.

She only has 4 mushrooms.


How many more mushrooms does Orla need?

$$19 - 4 = 15$$

Name: \_\_\_\_\_

Primary 5-a-day

Ruby



10th April

$2 + 7 =$

9

5

$+ 10 = 15$

$5 - 5 =$

0

$9 + 7 =$

16

Write in the missing numbers in this pattern.

32

31

30

29

28

27

Here are some signs.

=

-

+

Write a sign in each box to make this correct.

7

+

6

=

13

Emily is 11 years old.

Emily is 2 years **older** than Lily.

How old is Lily?

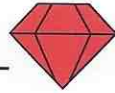
$11 - 2 = 9$

9

Name: \_\_\_\_\_

Primary 5-a-day

Ruby



11th April

$3 + 7 =$

10

$9 - 3 =$

6

$6 + 5 =$

11

$12 - 5 =$

7

Tick the calculation with the largest answer.

$7 + 7 = 14$

$12 - 2 = 10$

$10 + 3 = 13$

$15 - 3 = 12$

James has 8 pets.

Emma has 5 pets.

How many more pets does James have than Emma?

$8 - 5 = 3$

3

Write the missing number in the box.


$20 - 3 = 10 +$

7

Name: \_\_\_\_\_

Primary 5-a-day

Ruby



12th April

$6 + 2 =$

8

$7 - 7 =$

0

$8 + 5 =$

13

Double 9

18

Polly has 4 keys.

Beth has 3 keys.

How many keys do they have altogether?

$4 + 3 = 7$

7

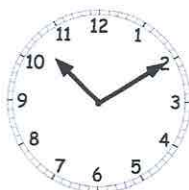
How much money is there?

$5 + 5 + 1 = 11$

11 p



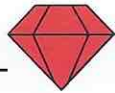
Tick the clock that shows **ten o'clock**



Name: \_\_\_\_\_

Primary 5-a-day

Ruby



13th April

$5 - 1 =$

4

$8 - 4 =$

4

$9 + 10 =$

19

Double 5

10

Circle the largest number.

28

15

12

22

31

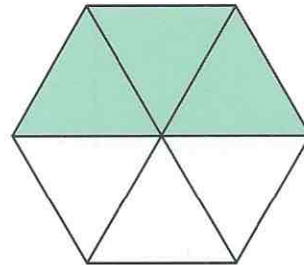
10

Is half of this shape shaded?

Yes



No



Fill in the missing numbers to make this pair of cards have a total of 20.

17

3

Fill in the missing numbers to make this pair of cards have a total of 20.

11

9

Name: \_\_\_\_\_

Primary 5-a-day

Ruby



14th April

$5 + 4 =$

9

$7 + 3 =$

10

$9 - 4 =$

5

$20 -$

3


$= 17$

Tick the name of the shape.

Square

Circle


Triangle



Mark has 10 strawberries.

He then eats some strawberries.

Here is how many he has left.



How many strawberries did Mark eat?

$10 - 4 = 6$

6

Circle all the **odd** numbers.

7

1

8

2

5

4

Name: \_\_\_\_\_

Primary 5-a-day

Ruby



15th April

$1 + 9 =$

10

$5 + 5 + 5 =$

15

$7 - 2 =$

5

13

$+ 7 = 20$

ninety-three

seventeen

thirty-six

17

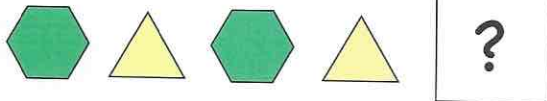
70

93

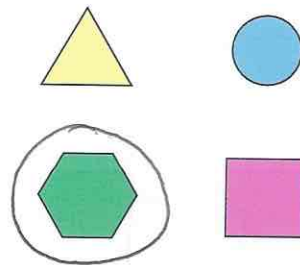
63

36

Here is a pattern of shapes.



Circle the missing shape.



Mia has 5 books.

Sophia has 4 books.

Isabella has 3 books.

How many books do they have altogether?

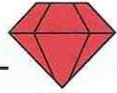
$5 + 4 + 3 = 12$

12

Name: \_\_\_\_\_

Primary 5-a-day

Ruby



16th April

$2 + 5 =$

7

$6 + 8 =$

14

$10 - 2 =$


8

$8 + 12 =$

20

How many trees are there?

12



Tick the number that is spelt correctly.

41

fourteen-one

18

eighteen

30

thirteen

Mark has 20 roses.

He gives away some of his roses.

Mark has 4 roses left.

How many roses did Mark give away?

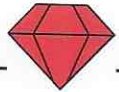
$20 - 4 = 16$

16

Name: \_\_\_\_\_

Primary 5-a-day

Ruby



17th April

$4 + 1 =$

5

$10 + 10 =$

20

$10 - 3 =$

7

$19 - 2 =$

17

Which of these numbers is less than 60 ?

71

49

80

49

A seedling is 9 centimetres tall.  
The seedling grows 6 centimetres.  
How tall is the seedling now?

$9 + 6 = 15$

15 centimetres

Write these numbers in the correct box.

11

4

5

10

even numbers

odd numbers

4

10

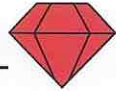
11

5

Name: \_\_\_\_\_

Primary 5-a-day

Ruby



18th April

$3 + 3 =$

$+ 1 = 10$

$4 - 3 =$

$- 3 = 8$

Put these numbers in order, from smallest to biggest.

smallest

biggest

Put a tick in a square that is **1 square left** of the shaded square.

		✓				
--	--	---	--	--	--	--

Write 3 numbers to make this calculation correct.

+

+

=

12

Name: \_\_\_\_\_

Primary 5-a-day

Ruby



19th April

$1 + 5 =$

6

$10 - 3 =$

7

$6 + 3 =$

9

$15 - 8 =$

7

Write the number that is  
2 more than 12

14

Write the number that is  
2 less than 20

18

Tick the correct answer.

$8 + 8 = 14$

$6 + 6 = 13$

$7 + 7 = 14$  ✓

$9 + 9 = 16$

Mark 35 in the correct square in this grid.

1	2	3	4	5	6	7	8	9	10
11	12								
				35					

Name: \_\_\_\_\_

Primary 5-a-day

Ruby



20th April

$7 + 2 =$

9

$10 + 10 =$

20

$10 - 6 =$

4

$13 + 2 + 2 =$

17

Noel is 12 years old.

How old was Noel 1 year ago?

11

Tick the day that comes in between Tuesday and Thursday.

Wednesday

Friday

Monday

Here are some number cards.

5

6

12

14

Choose two of the number cards to make this correct.

6

+

12


=

18

Name: \_\_\_\_\_

Primary 5-a-day

Ruby



21st April

$10 + 3 = \boxed{13}$


$7 + 8 = \boxed{15}$

$10 - \boxed{4} = 6$

$18 - 5 = \boxed{13}$

Add 3 to the number shown on the dice.

$6 + 3 = 9$



$\boxed{9}$

Matt cycles 14 metres.  
Conor cycles 5 metres.


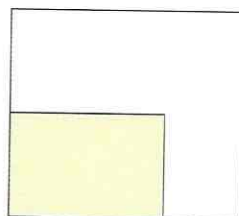
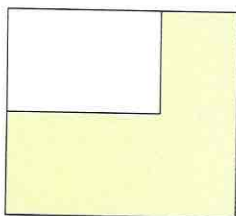


How far do they cycle in total?

$14 + 5 = 19$

$\boxed{19}$

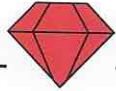
Tick the rectangle that has **half** shaded.



Name: \_\_\_\_\_

Primary 5-a-day

Ruby



22nd April

$$2 + 2 + 2 = \boxed{6}$$

$$3 - 1 = \boxed{2}$$

$$4 + 11 = \boxed{15}$$

$$13 - 9 = \boxed{4}$$

There are 10 girls.

6 girls leave.

How many girls are left?

$$10 - 6 = 4$$

Circle the coin that has the **highest** value.



One of the answers is wrong.

Put a cross (x) next to calculation with the wrong answer.

$$9 - 3 = 6$$

$$9 - 1 = 8$$

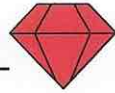
✗  $9 - 5 = 3$

$$9 - 8 = 1$$

Name: \_\_\_\_\_

Primary 5-a-day

Ruby



23rd April

$9 - 1 =$

8

$10 - 9 =$

1

$2 + 12 =$

14

$20 - 16 =$

4

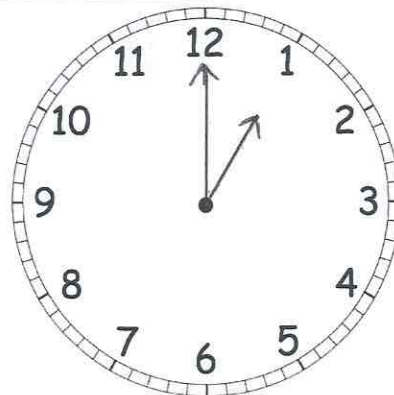
Write down the number that is **one less** than 64.

63

Write the number **thirty-two** in figures.

32

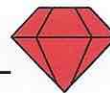
Show the time **1 o'clock** on the clock.



Name: \_\_\_\_\_

Primary 5-a-day

Ruby



24th April

$5 - 1 =$

4

10

$= 6 + 4$


$7 + 12 =$

19

$13 - 6 =$

7

Which dog is the **smallest**?



A

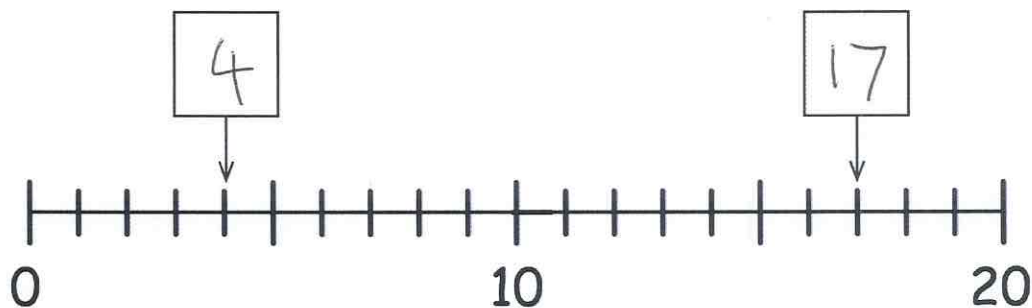
B

C

D

B

Write the missing numbers in the boxes.



Will jumps 8 metres.  
Ken jumps 5 metres.

How much further does Will jump  
than Ken?

$8 - 5 = 3$

3

metres

Name: \_\_\_\_\_

Primary 5-a-day

Ruby



25th April

$3 + 1 =$

4

$8 + 2 =$

10

$5 + 5 =$


10

$10 + 7 =$

17

How much water is in the jug?

5 litres



Write four **different** numbers in the boxes to make these correct.

$\boxed{15} - \boxed{5} = 10$

$\boxed{12} - \boxed{2} = 10$

Write down 3 **odd** numbers.

1

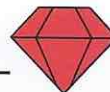
3

5

Name: \_\_\_\_\_

Primary 5-a-day

Ruby



26th April

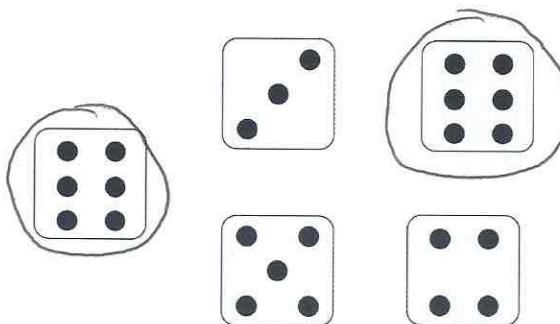
$$10 - \boxed{\text{○}} = 10$$

$$1 + 11 = \boxed{12}$$

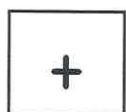
$$17 - 3 = \boxed{14}$$

$$9 + 6 = \boxed{15}$$

Circle the two dice that add up to 12



Here are two signs.

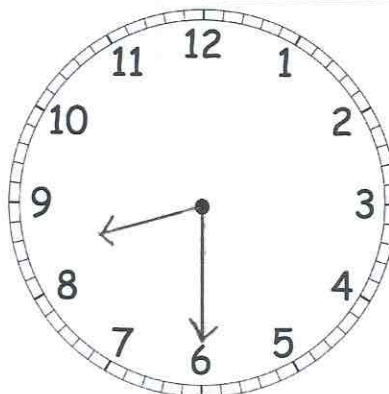


Write a sign in each box to make each calculation correct.

$$35 \boxed{-} 1 = 34$$

$$30 \boxed{-} 1 = 29$$


Show the time **half past eight** on the clock.



Name: \_\_\_\_\_

Primary 5-a-day

Ruby



27th April

$5 - 0 =$

5

$6 - 2 =$

4

$11 - 10 =$

1

$9 + 9 =$

18

nine

five

twelve

9

4

12

20

5

Tick the box with the wrong answer.

$20 - 1 = 19$

$7 + 7 = 14$

$3 + 8 = 10$  ✓

$19 - 10 = 9$

Write in the missing numbers in this pattern.

16

14

12

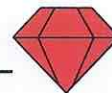
10

8

Name: \_\_\_\_\_

Primary 5-a-day

Ruby



28th April

$10 - 2 =$

8

$2 + 9 =$

11

$8 - 3 =$

5

16

$- 13 = 3$

Write down the whole number that is between 17 and 19.

18

Circle the coin that has the **lowest** value.



16 people are in a shop.

2 people leave the shop.

Then 5 more people leave the shop.

How many people are left in the shop?

$16 - 2 = 14$

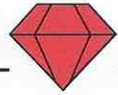
$14 - 5 = 9$

9

Name: \_\_\_\_\_

Primary 5-a-day

Ruby



29th April

$5 - 3 =$

2

$10 - 5 =$

5

16

$= 5 + 11$

$12 - 10 =$

2

Write the number **thirty** in figures.

30

Put these numbers in order, from smallest to biggest.

20

18

9

12

9

12

18

20

smallest

biggest

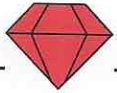
Write an **odd number** between 6 and 10.

7 or 9

Name: \_\_\_\_\_

Primary 5-a-day

Ruby



30th April

$4 - 0 =$

4

$3 + 5 =$

8

$2 + 2 + 3 =$

7

$17 - 4 =$

13

Write the number that is **one more** than 26.

27

There are 18 roses in a vase.

13 of the roses are red and the rest are white.

How many white roses are there?

$18 - 13 = 5$

5

Write a number in each box to make a correct calculation.

$\boxed{11} + 2 + \boxed{6} = 19$