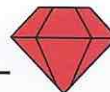


Name: _____

Primary 5-a-day

Ruby



26th April

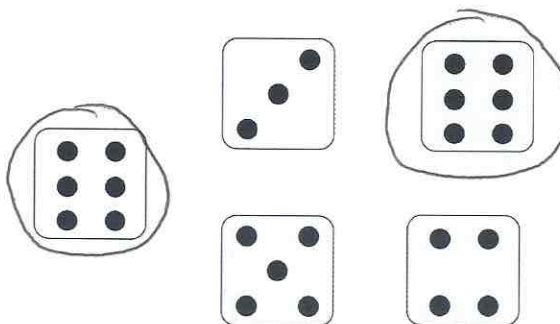
$10 - \boxed{\text{○}} = 10$

$1 + 11 = \boxed{12}$

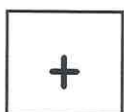
$17 - 3 = \boxed{14}$

$9 + 6 = \boxed{15}$

Circle the two dice that add up to 12



Here are two signs.



Write a sign in each box to make each calculation correct.

$35 \boxed{-} 1 = 34$

$30 \boxed{-} 1 = 29$

Show the time **half past eight** on the clock.

