

Name: _____

Primary 5-a-day

Ruby



8th April

$4 - 2 =$

2

$16 - 5 =$

11


$17 + 2 =$

19


$7 + 11 =$

18


Tick the box with the **most** balls.



7



6



8

Match the numbers that **add to 20**

11

15

18

12

8

9

2

5

Amelia has 13 sweets.

Olivia has 6 more sweets than Amelia.

How many sweets does Olivia have?

$13 + 6 = 19$

19