

Name: _____

Primary 5-a-day

Ruby



13th August

$1 + 15 =$

$3 + 3 =$

$9 - 7 =$

$5 + 5 + 10 =$

Match the numbers that **add to 10**

6

1

5

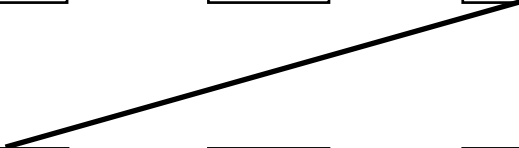
8

9

2

4


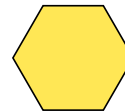

5



Here is a pattern of shapes.



Circle the missing shape.



Circle all the **odd** numbers.

9

1

7

6

2

3