

Name: _____

Primary 5-a-day

Ruby



24th August

$10 - 1 =$

$\square - 4 = 2$

$\square = 4 + 15$

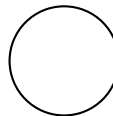
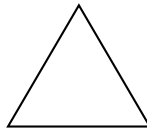

$3 + 17 =$

Match the shapes to their name.

triangle

circle

rectangle



Circle the coins that are worth **more than** 2p



Put a tick beside the correct answer.

$7 + 9 = 17$

$19 - 2 = 16$

$8 + 5 = 13$

$18 - 11 = 9$