

Name: _____

Primary 5-a-day

Ruby



6th August

$4 + 2 =$




$8 +$

$= 10$

$6 + 7 =$

$9 + 9 =$

Tick the box with the **most** balls.



Which of these numbers is **more than** 43 ?

44

39

41

Write down three numbers that have a **total of 16**