


Name: _____

Primary 5-a-day

Ruby 

13th August

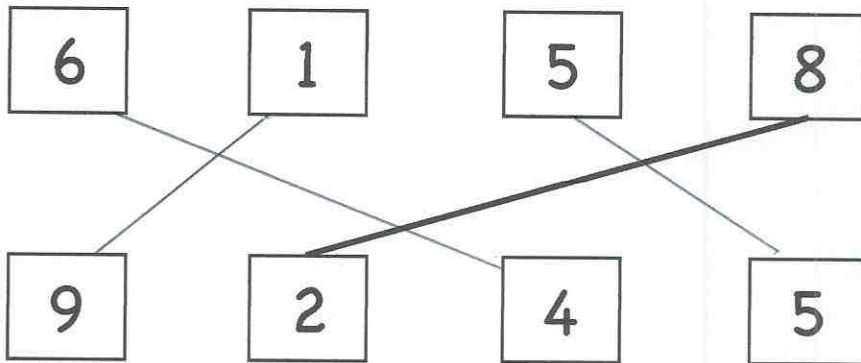
$1 + 15 = \boxed{16}$

$3 + 3 = \boxed{6}$

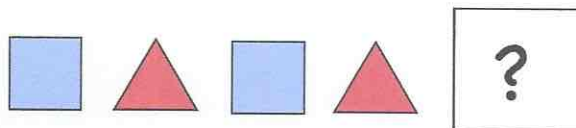
$9 - 7 = \boxed{2}$

$5 + 5 + 10 = \boxed{20}$

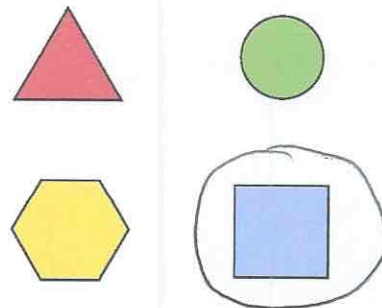
Match the numbers that **add to 10**



Here is a pattern of shapes.



Circle the missing shape.



Circle all the **odd** numbers.

