


Name: _____

Primary 5-a-day

Ruby 

6th August


$4 + 2 = \boxed{6}$

$8 + \boxed{2} = 10$

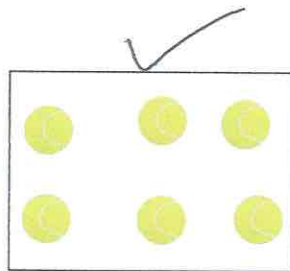
$6 + 7 = \boxed{13}$

$9 + 9 = \boxed{18}$


Tick the box with the **most** balls.



5



6



3

Which of these numbers is **more than 43**?

44

39

41

44

Write down three numbers that have a **total of 16**

5

10

1