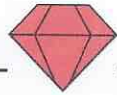


Name: \_\_\_\_\_

Primary 5-a-day

Ruby



8th August


$10 - 0 = \boxed{10}$

$8 - 6 = \boxed{2}$

$16 + 4 = \boxed{20}$

$15 - 15 = \boxed{0}$

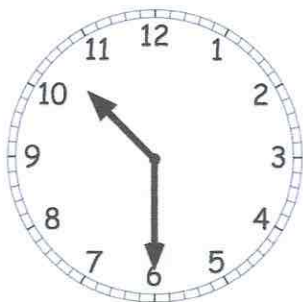
How many dots are there altogether?



Write the missing number in the box.

$5 + 9 - \boxed{7} = 7$

What time does the clock show?  
Tick the correct box.



half past 10

half past 9

half past 11

half past 6