

Name: _____

Primary 5-a-day

Ruby



21st December

$9 - 4 =$

$20 - 5 =$

$= 1 + 16$

$8 + 9 =$

Sort the jugs from least full to most full.

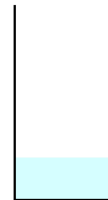
least
full

most
full


Jug 1



Jug 2



Jug 3


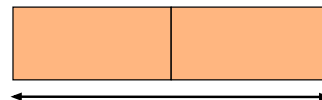


Here is a wooden block.



4 centimetres

How long would two wooden blocks be?



?

centimetres

Write down three numbers that have a **total of 18**