

Name: _____

Primary 5-a-day

Ruby



3rd December

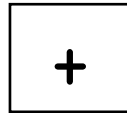
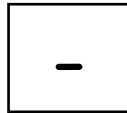

$3 - 1 =$

$10 - 4 =$

$5 + 15 =$

$6 + 5 + 4 =$

Here are some signs.



Write a sign in each box to make this correct.

14

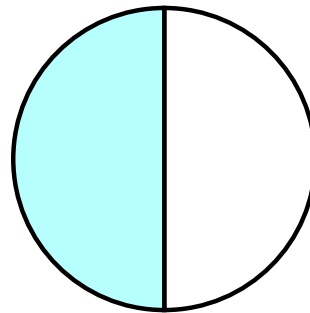
1

13

Is half of this shape shaded?

Yes

No



There are 12 pens in a tub.

Claire puts 3 more pens in the tub.

Then Eva takes 5 pens from the tub.

How many pens are in the tub?