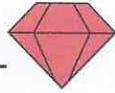


Name: _____

Primary 5-a-day

Ruby



19th December

$4 - 1 =$

3

$2 + 10 =$

12

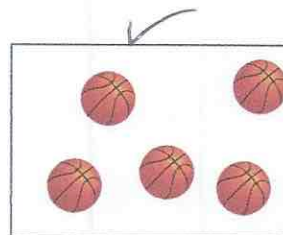


$10 - 8 =$

2


$17 - 16 =$

1

Tick the box with the **fewest** balls.



Here are two signs.



Write a sign in each box to make each calculation correct.

$17 \boxed{-} 1 = 16$

$29 \boxed{+} 1 = 30$

Jayden needs 16 socks.

He only has 7 socks.

How many more socks does Jayden need?

$16 - 7 = 9$

9