

Name: _____

Primary 5-a-day

Ruby



21st December

$9 - 4 =$

5

$20 - 5 =$

15

17

$= 1 + 16$

$8 + 9 =$

17

Sort the jugs from least full to most full.

least full

most full

2

3

1



Jug 1

Jug 2

Jug 3

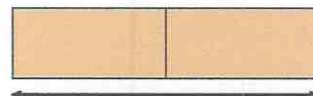


Here is a wooden block.



4 centimetres

How long would two wooden blocks be?



?

8

centimetres

Write down three numbers that have a **total of 18**

1

2

15