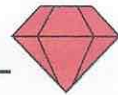


Name: _____

Primary 5-a-day

Ruby



7th December

$6 - 5 =$

$10 + 9 =$

$16 - 1 =$

$11 - 6 =$

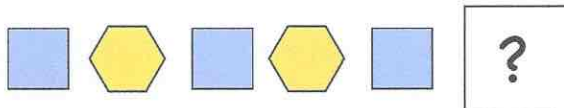
Lily jumps 7 metres.
Willow jumps 3 metres.

How much further does Lily jump than Willow?

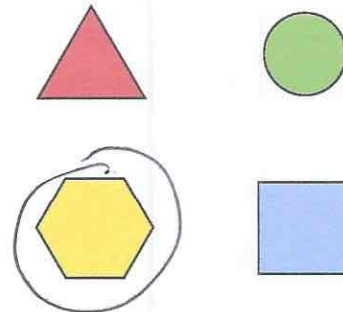
$7 - 3 = 4$

4 metres

Here is a pattern of shapes.



Circle the missing shape.



Write these numbers in the correct box.

10

15

13

14

even numbers

10 14

odd numbers

13 15