

Name: \_\_\_\_\_

Primary 5-a-day

Ruby



15th February

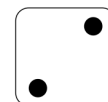



$6 - 2 =$

$3 +$    $= 10$

$4 + 8 =$

$9 + 9 =$

Circle the two dice that add up to 10



15 people are on a train.

3 people get off the train.

Then 5 more people get off the train.

How many people are left on the train?

Circle all the **odd** numbers.

3

8

7

5

10

4