

Name: \_\_\_\_\_

Primary 5-a-day

Ruby



16th February

$1 + 6 =$

$= 20 - 9$

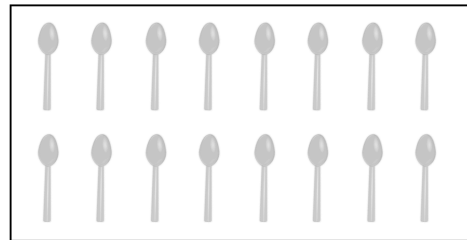
$10 - 8 =$

$18 - 8 =$

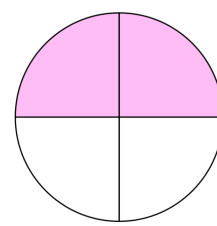
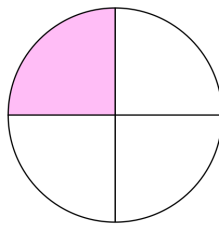
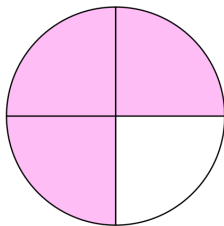
There are 16 spoons in a drawer.

7 spoons are taken out of the drawer.

How many are left?



Tick the circle that has **one quarter** shaded.



Write an **even number** between 7 and 13.