

Name: \_\_\_\_\_

Primary 5-a-day

Ruby



17th February


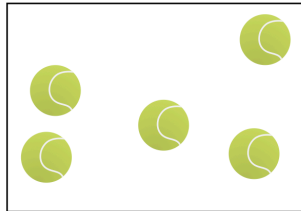

$4 - 1 =$

$10 - 10 =$

$10 + 9 =$

$17 - 8 =$

Tick the box with the **fewest** balls.



There are 10 sweets in bag.

4 are red and the rest are yellow.

How many yellow sweets are there?

Write down three numbers that have a **total of 20**