

Name: \_\_\_\_\_

Primary 5-a-day

Ruby



20th February

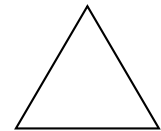
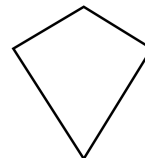
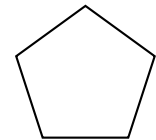
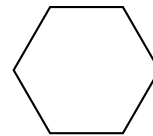
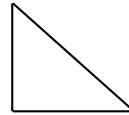
$3 - 1 =$

$5 + 10 =$

$10 - 4 =$

$20 - 1 =$

Tick the shape with the most sides.



Rory has 8 toys.

Arlo has 4 toys.

Theo has 3 toys.

How many toys do they have altogether?

Here are some number cards.

11

10

6

9

Choose two of the number cards to make this correct.

-

=

3