

Name: \_\_\_\_\_

Primary 5-a-day

Ruby



1st February

$1 + 3 =$

$10 - 4 =$

$7 + 10 =$

$12 - 6 =$

twenty-seven

thirty

fifty-four

27

13

54

30


45

Tick the name of the shape.

Cylinder

Cone

Cuboid



Write the missing number in the box.

$5 + 3 = 10 -$

Name: \_\_\_\_\_

Primary 5-a-day

Ruby



2nd February

$2 + 7 =$

$19 - 3 =$

$7 - 5 =$

$11 + 7 =$

Make each statement correct by writing **more** or **less** in each box.

36 is  than 80

21 is  than 19

35 is  than 51

Tick the number **eighty**

80

18

88

Martin hits the ball 20 metres.  
Shane hits the ball 13 metres.



How much further does Martin hit the ball than Shane?

metres

Name: \_\_\_\_\_

Primary 5-a-day

Ruby



3rd February

$6 + 1 =$

$4 + 8 =$

$9 - 7 =$

$20 - 17 =$

There are 11 cars.

3 cars drive away

How many cars are left?

Circle the coin that has the **highest** value.



Here is a pattern of shapes.



?

Circle the missing shape.



Name: \_\_\_\_\_

Primary 5-a-day

Ruby



4th February


$8 + 2 =$

$4 + 3 =$

$7 + 3 =$

$19 - 5 =$

What number is **2 less** than the number on the dice?



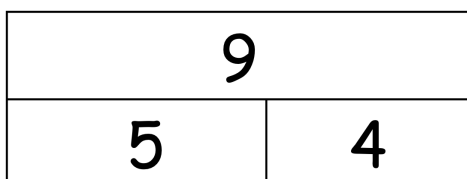
Alfie has a 10p coin.

He buys a sweet for 3p.

How much change will he get back?


 p

This picture shows  $5 + 4 = 9$



Here is another picture.

Write the missing number in the box.



Name: \_\_\_\_\_

Primary 5-a-day

Ruby



5th February

$5 + 1 =$

$13 - 12 =$

$11 - 6 =$

$7 + 9 =$

Willow has 4 balls.



Anna has 2 balls.



How many balls do they have altogether?

Tick the box that has 14p



Write the correct number in each box.

46 is 1 less than

80 is 1 more than

Name: \_\_\_\_\_

Primary 5-a-day

Ruby



6th February

$10 - 5 = \square$

$9 + 3 = \square$

$13 - 3 = \square$

$15 - 7 = \square$

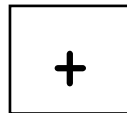
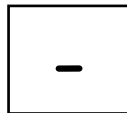

Put a tick (✓) above the dog that is 7<sup>th</sup> in the line.



start

end

Here are some signs.



Write a sign in each box to make this correct.

$19 \square 5 \square 14$

Stan has 8 conkers.

Kyle has 7 conkers.

How many conkers do they have altogether?

Name: \_\_\_\_\_

Primary 5-a-day

Ruby



7th February

$4 + 2 =$


$7 + 7 =$

$10 -$

$= 9$

$= 19 - 5$

How many balls are there?



Write 17 in the correct box in the grid.

1	2	3	4
5	6	7	

Charlotte has 11 pens.

Molly has **4 more** pens than Charlotte.

How many pens does Molly have?

Name: \_\_\_\_\_

Primary 5-a-day

Ruby



8th February

$1 + 2 =$

$18 - 2 =$

$3 + 6 =$

$15 + 2 + 2 =$

Fill in the missing numbers to make this pair of cards have a total of 10.

Fill in the missing numbers to make this pair of cards have a total of 10.

How many sides does a square have?

Write the missing number in the box.

$9 + 9 - \text{[ ]} = 8$

Name: \_\_\_\_\_

Primary 5-a-day

Ruby



9th February

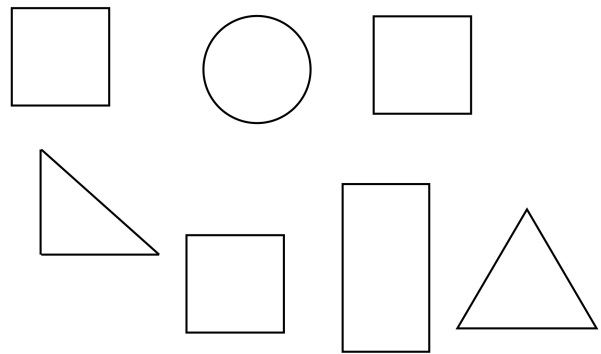
$1 + 13 = \square$

$9 - 8 = \square$

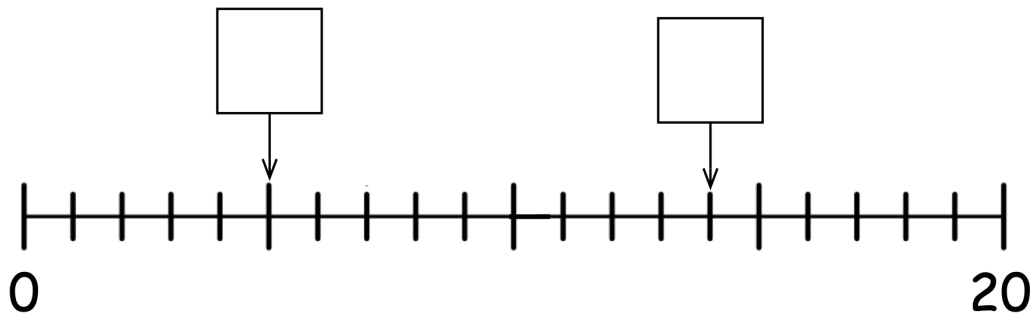
$10 + 10 = \square$

$11 - 4 = \square$

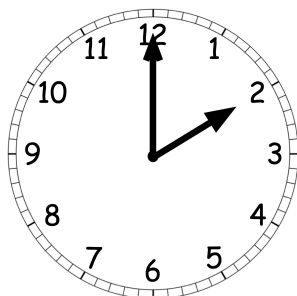
Tick the squares.



Write the missing numbers in the boxes.



What time does the clock show?  
Tick the correct box.



1 o'clock

3 o'clock

12 o'clock

2 o'clock

Name: \_\_\_\_\_

Primary 5-a-day

Ruby



10th February

$2 + 1 =$

$6 + 4 =$

$8 - 5 =$

$16 - 11 =$

How much money is there?

 p

Match the numbers that **add to 20**

18

10

19

16

10

2

4

1

Mia has 13 cups.

Ella has 5 cups.

How many more cups does Mia have than Ella?

Name: \_\_\_\_\_

Primary 5-a-day

Ruby



11th February


$8 - 1 =$

$2 + 3 + 4 =$

$11 + 4 =$

$9 + 10 =$

Which tree is the **shortest**?



Tick the correct answer.

$10 + 3 = 14$

$14 - 2 = 11$

$9 + 4 = 13$

$13 - 1 = 11$

Count up in tens.

10

20

Name: \_\_\_\_\_

Primary 5-a-day

Ruby



12th February

$7 - 0 =$

$7 + 6 =$

Half of 6 is

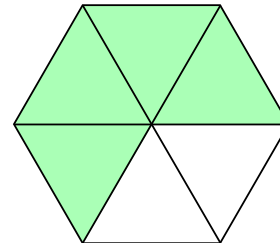
$+ 11 = 20$

Add together 5 and 5.

Is half of this shape shaded?

Yes

No



Write a number in each box to make a correct calculation.

+

11

+

=

20

Name: \_\_\_\_\_

Primary 5-a-day

Ruby



13th February

$1 + 8 =$

$2 + 4 =$

$9 - 5 =$

$20 - 7 =$

Write down the number that is **one less** than 18.

Holly has 20 pens.

She gives her mum some of her pens.

Holly has 11 pens left.

How many pens did Holly give her mum?

Write in the missing numbers in this pattern.

10

15

20

Name: \_\_\_\_\_

Primary 5-a-day

Ruby



14th February

$2 + 1 =$

$4 + 7 =$

$10 - 7 =$

Double 5

How many blocks taller is the large dog?



Tick the number that is spelt correctly.

13  
thirty

50  
fifty

31  
twenty-one

Tick the calculation with the smallest answer.

$10 + 6$

$20 - 8$

$11 + 4$

$19 - 2$

Name: \_\_\_\_\_

Primary 5-a-day

Ruby



15th February

$6 - 2 =$

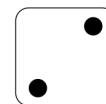



$3 +$

$= 10$

$4 + 8 =$

$9 + 9 =$

Circle the two dice that add up to 10



15 people are on a train.

3 people get off the train.

Then 5 more people get off the train.

How many people are left on the train?

Circle all the **odd** numbers.

3

8

7

5

10

4

Name: \_\_\_\_\_

Primary 5-a-day

Ruby



16th February

$1 + 6 =$

$= 20 - 9$

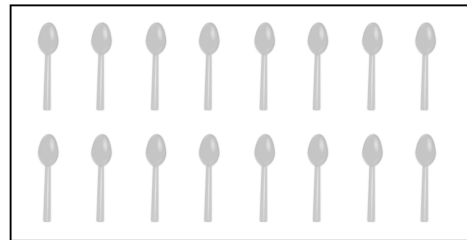
$10 - 8 =$

$18 - 8 =$

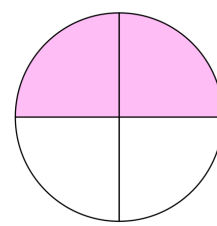
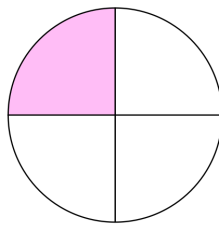
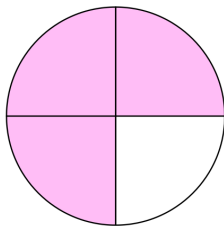
There are 16 spoons in a drawer.

7 spoons are taken out of the drawer.

How many are left?



Tick the circle that has **one quarter** shaded.



Write an **even number** between 7 and 13.

Name: \_\_\_\_\_

Primary 5-a-day

Ruby



17th February


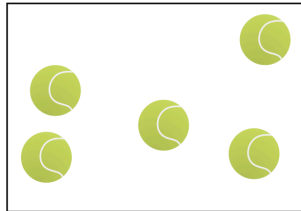

$4 - 1 =$

$10 - 10 =$

$10 + 9 =$

$17 - 8 =$

Tick the box with the **fewest** balls.



There are 10 sweets in bag.

4 are red and the rest are yellow.

How many yellow sweets are there?

Write down three numbers that have a **total of 20**

Name: \_\_\_\_\_

Primary 5-a-day

Ruby



18th February

$14 + 2 =$

$4 + 5 =$

$10 -$

$= 6$

$5 +$

$= 12$

Which of these numbers is  
**less than 50** ?

62

77

48

Circle the coins that are worth  
**more than 50p**



Jenny needs 15 pence.

She only has 6 pence.

How many more pence does Jenny  
need?

Name: \_\_\_\_\_

Primary 5-a-day

Ruby



19th February

$4 + 6 =$


$7 + 4 =$

$6 =$

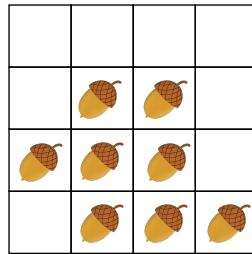
$- 3$

$9 + 11 =$

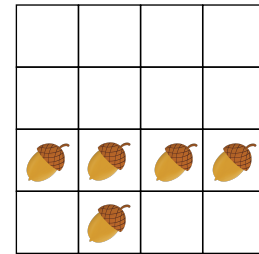
Circle the person with the fewest acorns.



Ted



Will



Max

Put these numbers in order, from smallest to biggest.

7

9

5

1

smallest

biggest

Write 3 numbers to make this calculation correct.

+

+

= 15

Name: \_\_\_\_\_

Primary 5-a-day

Ruby



20th February

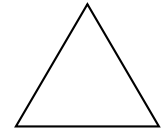
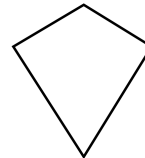
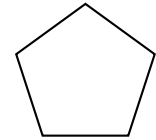
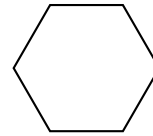
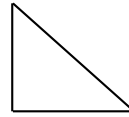
$3 - 1 =$

$5 + 10 =$

$10 - 4 =$

$20 - 1 =$

Tick the shape with the most sides.



Rory has 8 toys.

Arlo has 4 toys.

Theo has 3 toys.

How many toys do they have altogether?

Here are some number cards.

11

10

6

9

Choose two of the number cards to make this correct.

-

=

3

Name: \_\_\_\_\_

Primary 5-a-day

Ruby



21st February

$1 + 5 =$

$2 + 14 =$

$8 + 3 =$

$\square + 6 = 19$

Write the missing number.

17

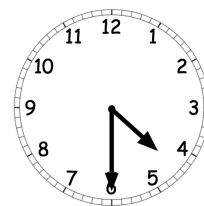
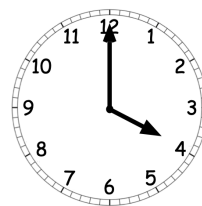
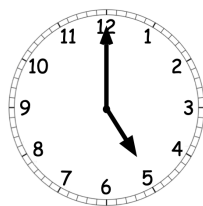
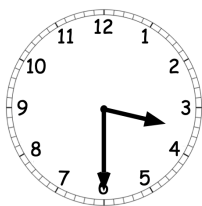
18

19

21

Write the number **sixteen** in figures.

Tick the clock that shows **4 o'clock**



Name: \_\_\_\_\_

Primary 5-a-day

Ruby



22nd February

$10 - 2 =$

$4 + 9 =$

$7 + 4 =$

$13 + 5 =$

Write in the missing numbers in this pattern.

92

91

87


Put a tick in a square that is **2 squares right** of the shaded square.

<input type="checkbox"/>	<input type="checkbox"/>	<input type="checkbox"/>	<input checked="" type="checkbox"/>	<input type="checkbox"/>	<input type="checkbox"/>	<input type="checkbox"/>
--------------------------	--------------------------	--------------------------	-------------------------------------	--------------------------	--------------------------	--------------------------

Jenny has 6 apples.

She eats **half** of the apples.

How many does she have left?



Name: \_\_\_\_\_

Primary 5-a-day

Ruby



23rd February

$16 + 1 =$

$5 + 4 =$

$7 - 6 =$

$15 - 8 =$

Write the number that is  
**10 less than 30**

Write the number that is  
**10 more than 50**

Tom has 5 coins.

Ben has **double** the number of coins  
that Tom has.

How many coins does Ben have?

Write these numbers in the correct box.

1

4

10

9

even numbers

odd numbers

Name: \_\_\_\_\_

Primary 5-a-day

Ruby



24th February


$2 + 2 =$

$10 - 7 =$

$17 + 2 =$

$10 + 5 + 5 =$

How many dots are there altogether?



Tick the day that comes in between Wednesday and Friday.

Saturday

Thursday

Tuesday

A shop sells

an apple for 9p

a banana for 8p

a strawberry for 4p

a cherry for 2p

Find the cost of



p

Name: \_\_\_\_\_

Primary 5-a-day

Ruby



25th February

$3 + 4 =$

Double 6

$18 - 4 =$

$8 +$    $= 15$


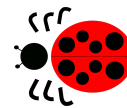
Write down the whole number that is between 43 and 45.

Here is a ladybird.






The ladybird makes a **half turn**.

Circle which way the ladybird now faces.



Tick the rectangle that has **half** shaded.



Name: \_\_\_\_\_

Primary 5-a-day

Ruby



26th February

$4 + 4 =$

$9 - 9 =$

$10 - 8 =$

$16 - 11 =$

Tick the day after Monday.

Wednesday

Tuesday


Sunday

Thursday

Ben has 20 cherries.

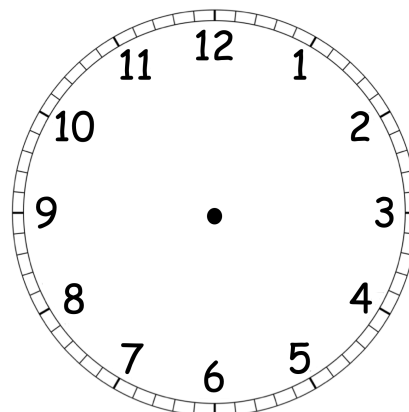
He then eats some of the cherries.

Here is how many he has left.



How many cherries did Ben eat?

Show the time **half past four** on the clock.



Name: \_\_\_\_\_

Primary 5-a-day

Ruby



27th February

$8 + 1 =$

$5 + 7 =$

$6 + 9 =$

$17 + 3 =$

Circle the largest number.

51

48

19

27

60

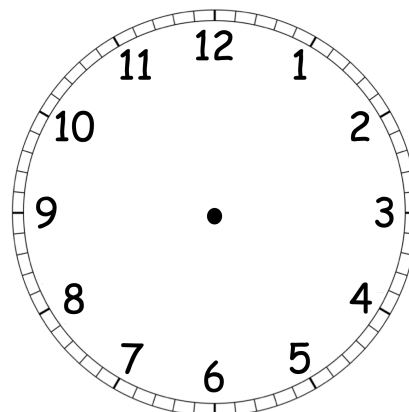
33

Write four **different** numbers in the boxes to make these correct.

$\square - \square = 5$

$\square - \square = 5$

Show the time **10 o'clock** on the clock.



Name: \_\_\_\_\_

Primary 5-a-day

Ruby



28th February

$7 - 3 =$

$4 +$

$= 10$

$4 + 9 =$

$8 + 9 =$

Write these numbers in the correct box.

16

9

15

13

less than 14

more than 14

Write the missing number.

$+ 8 + 3 = 15$

Write in the missing numbers in this pattern.

4

6

8

Name: \_\_\_\_\_

Primary 5-a-day

Ruby



29th February

$2 + 5 =$

$7 - 4 =$

$10 -$

$= 5$

Double 1

Write the number that is  
**one more** than 59.

Here are two signs.

Write a sign in each box to make  
each calculation correct.

$20$

$1 = 21$

$40$

$1 = 39$

Grace is 12 years old.

Isla is 3 years **younger** than Grace.

How old is Isla?