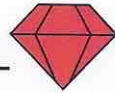


Name: \_\_\_\_\_

Primary 5-a-day

Ruby



16th February

$1 + 6 =$

7

11

$= 20 - 9$

$10 - 8 =$

2

$18 - 8 =$

10


There are 16 spoons in a drawer.

7 spoons are taken out of the drawer.

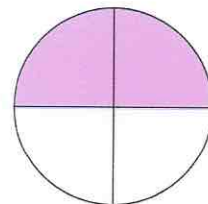
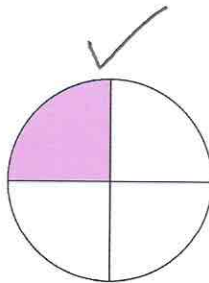

How many are left?

$16 - 7 = 9$

9



Tick the circle that has **one quarter** shaded.



Write an **even number** between 7 and 13.

could also be  
10, 12

8