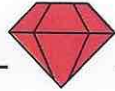


Name: _____

Primary 5-a-day

Ruby



17th February

$4 - 1 =$

3

$10 - 10 =$

0


$10 + 9 =$

19


$17 - 8 =$

9

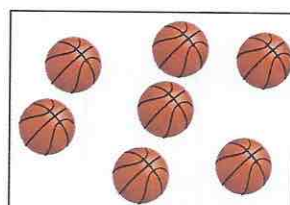
Tick the box with the **fewest** balls.



6



5



7

There are 10 sweets in bag.

4 are red and the rest are yellow.

How many yellow sweets are there?

$10 - 4 = 6$

6

Write down three numbers that have a **total of 20**

9

5

6