

Name: _____

Primary 5-a-day

Ruby



19th February

$4 + 6 =$

10

$7 + 4 =$

11

$6 =$

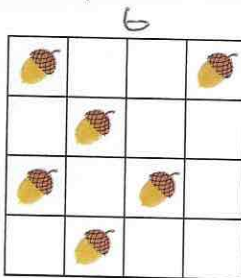
9

$- 3$

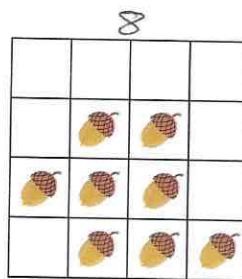
$9 + 11 =$

20

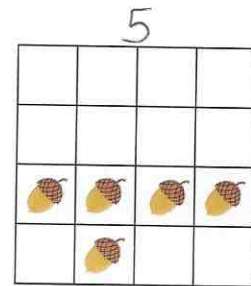
Circle the person with the fewest acorns.



Ted



Will



Max

Put these numbers in order, from smallest to biggest.

7

9

5

1

1

5

7

9

smallest

biggest

Write 3 numbers to make this calculation correct.

$$\boxed{6} + \boxed{4} + \boxed{5} = 15$$